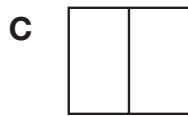
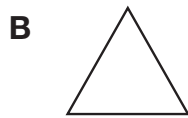

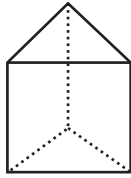


1. Which shows the top view of this three dimensional figure?



2. The temperature at 6 A.M. was 3° F. At noon it was 10° F. What was the change in the temperature?

- A 30°
- B 13°
- C 7°
- D 0°

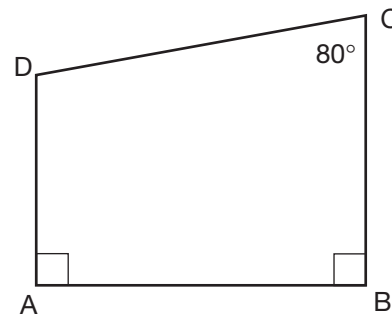
3. Adam wants to make a graph showing his puppy's weight each month for a year? Which would be the best type of graph for him to use?

- A Histogram
- B Circle graph
- C Line graph
- D Frequency chart

4. Is the number 67 prime or composite?

5. The batting averages for the four best hitters on the Eagles little league team are: 0.312, 0.322, 0.308, and 0.296. Write the batting averages in order from greatest to least.

6. What is the measure of angle D?



7. What is the prime factorization for 40?
